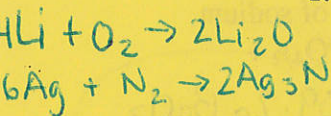


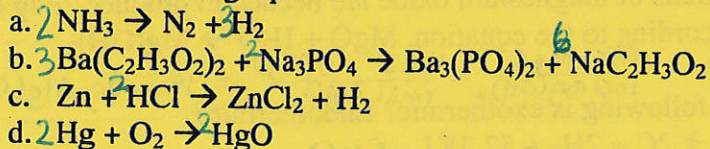
Final Exam Review

This review is from chapter 9 to the present.

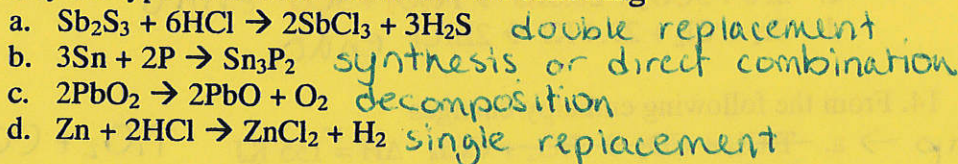
- Write a balanced equation for each of the following reactions.
 - Lithium reacts with oxygen to produce lithium oxide.
 - Silver(I) nitride is produced when silver reacts with atmospheric nitrogen.



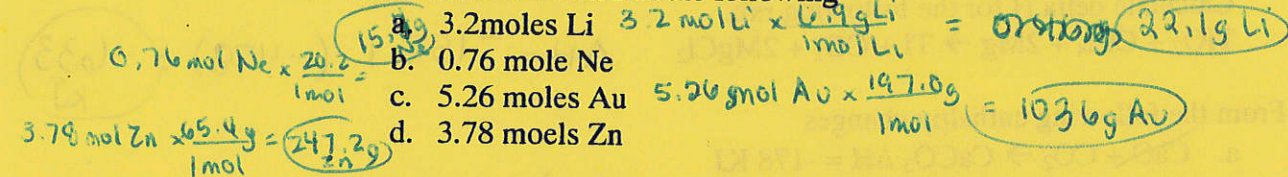
- balance the following equations



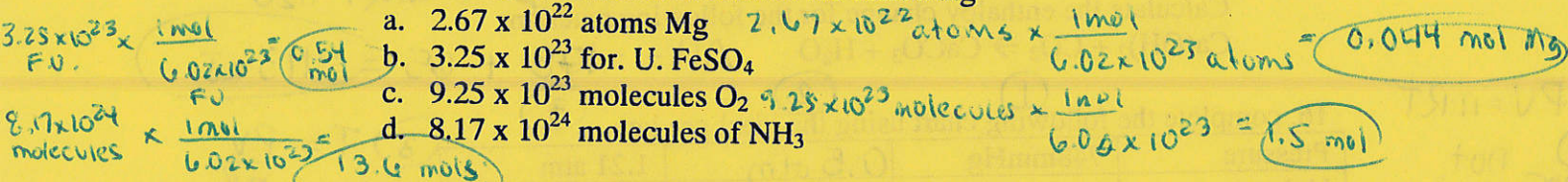
- Identify the type of reaction for each of the following



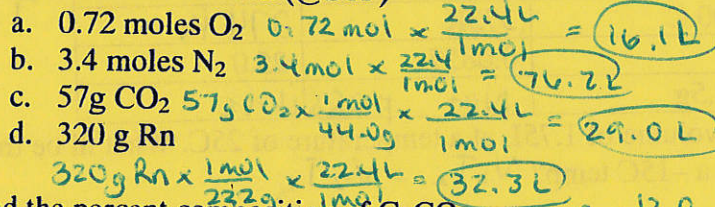
- Find the mass of each of the following



- Find the number of moles in each of the following



- Find the volume of each (@STP)



- Find the percent composition of CaCO_3

$$\text{Ca} = 40.1 \text{ g} + \text{C} = 12.0 \text{ g} + (3 \times 16.0) = 100.1 \text{ g}$$

$$\text{C} = \frac{12.0}{100.1} \times 100 = 12\%$$

$$\text{Ca} = \frac{40.1}{100.1} \times 100 = 40\%$$

$$\text{O} = \frac{48}{100.1} \times 100 = 48\%$$

- Find the empirical formula of a compound which contains 6.5 g K, 5.9 g Cl and 8.0g O

$$\text{K} = 6.5 \text{ g} \times \frac{1 \text{ mol}}{39.1} = 0.166 = 1$$

$$\text{Cl} = 5.9 \text{ g} \times \frac{1 \text{ mol}}{35.5} = 0.166 = 1$$

$$\text{O} = 8.0 \text{ g} \times \frac{1 \text{ mol}}{16.00} = 0.5 / 0.166 = 3$$



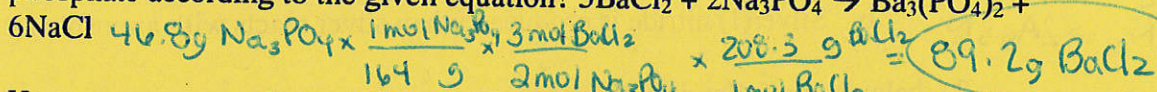
- The explosive, TNT, is composed of 37.0% carbon, 2.20% H, 18.5% nitrogen and 42.3% oxygen

- Determine the empirical formula
- The molar mass of TNT is 227g/mol. What is the molecular formula?

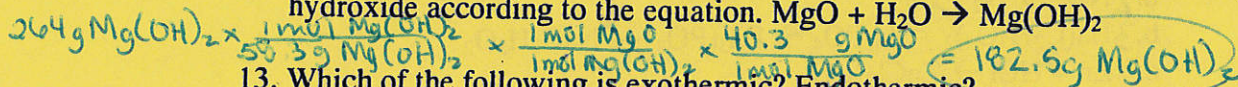
10. How many moles of copper will be produced from 2 moles of Al?



11. What mass of Barium chloride is needed to react completely with 46.8g of sodium phosphate according to the given equation? $3\text{BaCl}_2 + 2\text{Na}_3\text{PO}_4 \rightarrow \text{Ba}_3(\text{PO}_4)_2 + 6\text{NaCl}$



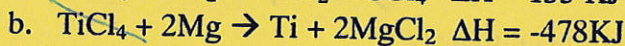
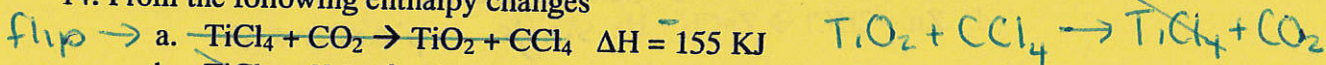
12. How many grams of magnesium oxide are needed to produce 264g of magnesium hydroxide according to the equation. $\text{MgO} + \text{H}_2\text{O} \rightarrow \text{Mg}(\text{OH})_2$



13. Which of the following is exothermic? Endothermic?

- a. $\text{C}_2\text{H}_4 \rightarrow 2\text{C} + 2\text{H}_2 + 52.3\text{KJ}$ exo
- b. $\text{B}_2\text{H}_6 + 6\text{H}_2\text{O} \rightarrow 2\text{H}_2\text{BO}_3 + 6\text{H}_2 + 493.4\text{KJ}$ exo
- c. $2\text{Fe} + 3\text{CO}_2 + 26.8\text{KJ} \rightarrow \text{Fe}_2\text{O}_3 + 3\text{CO}$ endo
- d. $\text{Br}_2 + \text{Cl}_2 + 29.4\text{ KJ} \rightarrow 2\text{BrCl}$ endo

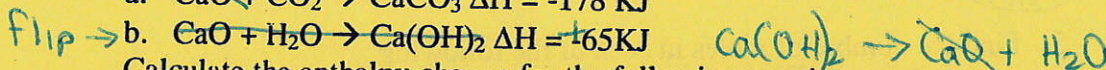
14. From the following enthalpy changes



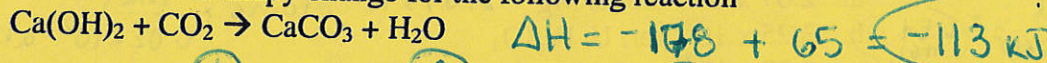
Calculate delta H for the following rxn.



15. From the following enthalpy changes



Calculate the enthalpy change for the following reaction



16. complete the following chart using the ideal gas law

| | (1) | (2) | (3) |
|----------|---------|--------------|----------|
| Pressure | 748mmHg | 0.5 atm | 1.21 atm |
| Volume | | 5.25L | 465L |
| Temp | 200 C | 373K | 274 K |
| Moles | | 0.0857 | 25.0 |
| Mass | 12.5g | Not possible | |

$T = \frac{PV}{nR}$
 $T = \frac{(1.21)(465)}{(25.0)(0.0821)}$

$PV = nRT$
 (1) not possible
 (2) $P = \frac{nRT}{V}$
 $P = \frac{(0.0857)(0.0821)}{5.25}$

17. A balloon has a volume of 1.75L at a temperature of 25C. What will be the volume if you leave it in a -15C temp? $V_1T_2 = V_2T_1$

$(1.75)(-15 + 273) = (x)(25 + 273)$ $x = 1.52\text{ L}$

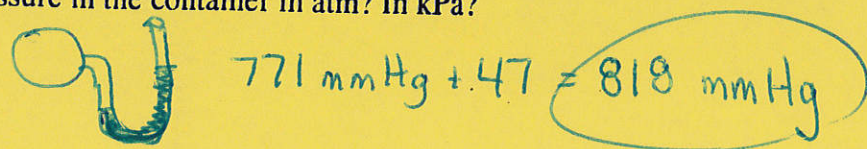
18. What is the volume in liters of a sample of 100.0g of O₂ at 298K and a pressure of 3.33 atm? $n = 100.0\text{g O}_2 \times \frac{1\text{ mol}}{32.0\text{g}} = 3.13\text{ mol}$

$V = \frac{nRT}{P} = \frac{(3.13)(0.0821)(298)}{3.33} = 23.0\text{ L}$

19. A gas mixture contains hydrogen, helium, neon and argon. The total pressure of the mixture is 93.6kPa. The partial pressure of He, Ne and Ar are 15.4kPa, 25.7kPa and 35.6 kPa respectively. What is the pressure exerted by H?

$P_T = P_A + P_B + \dots$
 $93.6 = 15.4 + 25.7 + x$
 $x = 52.5\text{ kPa}$

20. The mercury level on the container side of a monometer is 47mm lower than the level on the open side. The atmospheric pressure is 771 mmHg. What is the pressure in the container in atm? In kPa?

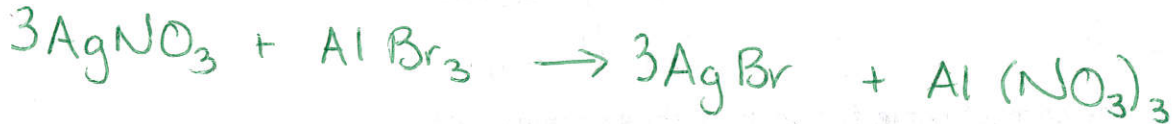


V. What is the percentage of carbon in sodium carbonate, Na_2CO_3 ?

$$\frac{106 \text{ g}}{106.0 \text{ g}} = \frac{x}{100}$$

$$x = 11.3\%$$

VI. Write a balanced equation for the double replacement reaction between silver nitrate and aluminum bromide.



VII. A compound was analyzed in the lab to determine its empirical formula. Analysis found the following elements and amounts: 9.00 g of carbon, 1.50 grams of hydrogen and 4.00 grams of oxygen.

a. What is the empirical formula for this compound?

$$\frac{9.00 \text{ g C}}{x \text{ mol}} = \frac{12.0 \text{ g}}{1 \text{ mol}} \quad x = 0.75 \text{ mol (3)}$$

$$\frac{1.50 \text{ g H}}{x \text{ mol}} = \frac{1.0 \text{ g}}{1 \text{ mol}} \quad x = 1.50 \text{ mol (6)}$$

$$\frac{4.00 \text{ g O}}{x \text{ mol}} = \frac{16.0 \text{ g}}{1 \text{ mol}} \quad x = 0.25 \text{ mol (1)}$$

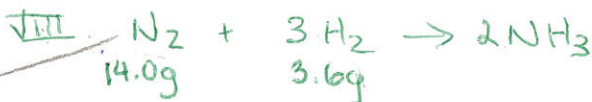
$\text{C}_{.75} \text{H}_{1.5} \text{O}_{.25}$



b. The molecular mass of the compound is 116 g/mol. What is its molecular formula?

$$\text{C}_3\text{H}_6\text{O} = 58 \text{ g/mol}$$

$$\frac{116}{58} = 2 \quad \text{so} \dots \text{C}_6\text{H}_{12}\text{O}_2$$



ⓁⓅ $\frac{1 \text{ mol} = 28.0 \text{ g}}{x} = \frac{14.0 \text{ g}}{x} \quad x = 0.5 \text{ mol}$

$$\frac{1 \text{ mol} = 2.0 \text{ g}}{x} = \frac{3.6 \text{ g}}{x} \quad x = 1.8 \text{ mol}$$

$$\% \text{ yield} = \frac{14.5}{17} = 85\%$$

$$\frac{3 \text{ mol H}_2 = 2 \text{ mol NH}_3}{1.8 \text{ mol}} \quad x = 1.2 \text{ mol NH}_3$$

$$\frac{1 \text{ mol} = 2 \text{ mol NH}_3}{0.5} = \frac{x}{x}$$

$$x = 1.0 \text{ mol} \rightarrow 1 \text{ mol NH}_3 = 17.0 \text{ g}$$

IX $P = 0.96$
 $V = 6.46$
 $n = x$

$$R = 0.0821$$

$$T = 21 + 273 = 294 \text{ K}$$

$$(0.96)(6.46) = (x)(0.0821)(294)$$

$$x = 0.25 \text{ mol}$$

$$\frac{1 \text{ kg}}{13.5 \text{ kg}} = \frac{1000 \text{ g}}{13500 \text{ g}}$$

$$D = \frac{M}{V}$$

$$\frac{19.3 \text{ g}}{13500 \text{ g}} = \frac{1 \text{ cm}^3}{x \text{ cm}^3} \quad x = 699.4 \text{ cm}^3$$

$$10.0 \times 30.0 \times 3.0 = 600 \text{ cm}^3 \quad \text{NO !!}$$

I. Write correct formulas for the following compounds:

a. potassium sulfate



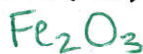
c. dinitrogen pentoxide



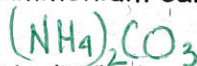
e. aluminum iodide



b. iron (III) oxide



d. ammonium carbonate



f. tin (IV) phosphate



II. Write the correct name for each of these compounds:

a. $Ba(NO_3)_2$

barium nitrate

c. Na_2S

sodium sulfide

e. $CoSO_4$

Cobalt (III) sulfate

b. MnO

manganese (II) oxide

d. $Ca(OH)_2$

calcium hydroxide

f. CCl_4

carbon tetrachloride

III. Determine the molecular weight of the following compounds.

a. $Al_2(SO_4)_3$

$$(2 \times 27) + (3 \times 32.1) + (12 \times 16)$$

$$342.3 \frac{\text{amu}}{\text{mol}}$$

b. $BaCl_2 \cdot 2H_2O$

$$(1 \times 137.3) + (2 \times 35.5) + (4 \times 1) + (2 \times 16) =$$

$$244.2 \frac{\text{amu}}{\text{mol}}$$

IV. Make the following conversions:

a. convert 4.58 g. of NaCl to moles

$$\frac{4.58 \text{ g}}{x \text{ mol}} = \frac{58.5 \text{ g}}{1 \text{ mol}} \quad x = 0.078 \text{ moles}$$

b. convert 1.35 moles of $AgNO_3$ to grams

$$\frac{1.35 \text{ mol}}{x \text{ g}} = \frac{1 \text{ mol}}{169.9 \text{ g}} \quad x = 229 \text{ g}$$

c. convert 3.88 moles of neon gas to liters @ STP

$$P = 101.3 \text{ kPa or } 1 \text{ atm}$$

$$V = x$$

$$n = 3.88$$

$$R = 8.31 \text{ or } 0.0821$$

$$T = 273$$

$$PV = nRT$$

$$\text{STP } T = 273 \text{ K}$$

$$P = 101.3 \text{ kPa or } 1 \text{ atm}$$

$$V = \frac{(3.88)(0.0821)(273)}{1} = 86.96 \text{ L}$$

$$V = \frac{(3.88)(8.31)(273)}{101.3} = 86.9 \text{ L}$$

Academic Chemistry Final Exam Review

These problems are an example of some of the types of problems that you may see on the academic chemistry final.

1. John used 4.64 g of ethanol, C_2H_5OH , in an experiment. How many moles did he use? 0.101 mol
2. What is the percentage of oxygen in calcium nitrate, $Ca(NO_3)_2$? 58.5%
3. Find the empirical formula of a compound containing 63.5 g Ag, 8.25 g N, and 28.26 g O.
 0.589 mol 0.589 mol 1.77 mol AgNO₃
4. Hydrogen can be produced by this reaction: $Mg + 2 HCl \rightarrow MgCl_2 + H_2$. How many grams of $MgCl_2$ can be produced if 182 g of HCl are reacted?
 36.5 g/mol 95.3 g/mol
5. A mixture of 10.0 g of powdered iron and 10.0 g of powdered sulfur is heated and a reaction forms iron (III) sulfide. How many grams of iron (III) sulfide are formed?
 $182 \times \frac{1}{36.5} \times \frac{1}{2} \times \frac{95.3}{1} = 237.6 \text{ g}$
 $2Fe + 3S \rightarrow Fe_2S_3$
6. What volume will 5.4L of gas at 40°C occupy if the temperature is lowered to 0°C?
 313 K 273 K $\frac{V_1}{T_1} = \frac{V_2}{T_2}$ 4.7 L
7. The pressure exerted by 16.0 L of gas is 740.0 mmHg. If the volume is increased to 20.0 L, what will the new pressure of the gas be?
 $P_1 V_1 = P_2 V_2$ 592 mmHg
8. Write the correct formulas for the following compounds:

| | |
|----------------------------------|--------------------------------------|
| a. Potassium sulfate K_2SO_4 | d. ammonium carbonate $(NH_4)_2CO_3$ |
| b. Iron (III) oxide Fe_2O_3 | e. aluminum iodide AlI_3 |
| c. Dinitrogen pentoxide N_2O_5 | f. tin (IV) phosphate $Sn_3(PO_4)_4$ |
9. Write the correct name for each of these compounds:

| | |
|--------------------------------|---|
| a. $Ba(NO_3)_2$ barium nitrate | d. $Ca(OH)_2$ calcium hydroxide |
| b. MnO manganese (II) oxide | e. $MgSO_4$ barium sulfate magnesium sulfate |
| c. Na_2S sodium sulfide | f. CCl_4 carbon tetrachloride |
10. Determine the molar mass of $Al_2(SO_4)_3$. 342.3 g/mol
11. Make the following conversions:

| |
|--|
| a. 4.58 g of NaCl to moles 58.5 g/mol 0.078 mol |
| b. 1.35 moles of $AgNO_3$ to grams 169.9 g/mol 229.4 g |
12. What element is this electron configuration showing ... $1s^2 2s^2 2p^6 3s^2 3p^3$?
P

$$3.6 \times \frac{1}{1} \times \frac{2}{3} \times \frac{17}{1} = 40.8 \text{ g} \quad 14 \times \frac{1}{28} \times \frac{2}{1} \times \frac{17}{1} = 17.0 \text{ g}$$


13. Tom performs a reaction between 3.6 g of hydrogen and 14.0 g of nitrogen to produce ammonia (NH₃) by this reaction... $3 \text{ H}_2 + \text{N}_2 \rightarrow 2 \text{ NH}_3$.

- a. Which of these two will run out first?...this is not a guess do the math **N₂**
- b. How many grams of NH₃ would this reaction produce theoretically? **17.0 g**
- c. If 14.5 g were actually produced, what would the percent yield be? **85.3%**

14. How many moles of He gas are contained in a 6.46 L balloon if the temperature is 21°C and the pressure is 0.96 atm? $PV = nRT$ $n = \frac{PV}{RT}$ **0.258 mol** **293 K**

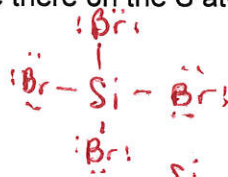
15. Of the elements P, S Ar and Ca, which is the largest in size? Which is the smallest?

16. Draw the Lewis dot structure for H₂S.



- a. What shape will this be? **bent**
- b. How many ^{pairs of} unpaired _{shared} electrons are there on the S atom? **2**

17. Draw the Lewis dot structure for SiBr₄.




- a. What shape is this molecule? **tetrahedral**
- b. How many ^{pairs of} shared electrons are there on the Si atom? **4**

18. Balance the following equations and identify the type of reaction for each:

- a. $2 \text{ NaCl} + \text{Cu(OH)}_2 \rightarrow 2 \text{ NaOH} + \text{CuCl}_2$ **DR**
- b. $\text{K}_2\text{CO}_3 \rightarrow \text{K}_2\text{O} + \text{CO}_2$ **Decomposition**
- c. $2 \text{ N}_2 + 5 \text{ O}_2 \rightarrow 2 \text{ N}_2\text{O}_5$ **Direct Combination**
- d. $\text{ZnCl}_2 + \text{Li} \rightarrow \text{LiCl}_2 + \text{Zn}$ **SR**

19. $\text{C(s)} + \text{O}_2(\text{g}) \rightleftharpoons \text{CO}_2(\text{g})$ $\Delta H^\circ = -393.5 \text{ kJ/mol}$

- a. Is this reaction endothermic or **exothermic**?
- b. If 393.5 kJ were written in the equation would it be on the right or the left? **right**
- c. Sketch the graph of this reaction. 
- d. Will the container feel **warm** or cold?

20. What will the volume of a gas be at 15°C and 1.4 atm if it starts at 3.7 L at 45°C and 4.3 atm? $\frac{P_1 V_1}{T_1} = \frac{P_2 V_2}{T_2}$ **10.3 L**

21. How much will the boiling point change if **5** 275 g of sugar (C₆H₁₂O₆) are added to 1500 g of water? **3.96°C**

$$K_b = 1.86 \text{ }^\circ\text{C/m}$$

$$3.96 \text{ }^\circ\text{C}$$

$$180.0 \text{ g/mol}$$

$$1.5 \text{ kg}$$

